

Name(s) _____

Modern Day Country Evaluation

Country: _____

QUESTIONS 1-6 ARE FOUND IN ABC-CLIO

Within the country topics refer to the carrot "Media." Click and print the POLITICAL MAP of your specific country and answer questions 1 and 2.

1. Latitude/Longitude: Provide the Name and Lat/Long for the capital, the northern most city, southern most city, eastern most city, and western most city

Capital:

North:

South:

East:

West:

2. What is the straight line distance from the capital of your country to all the capitals of all countries that are directly connected to your country? You are only responsible for the visible capitals.

3. Create a flow chart depicting the government. Be sure to identify the Executive, Legislature, and Judicial



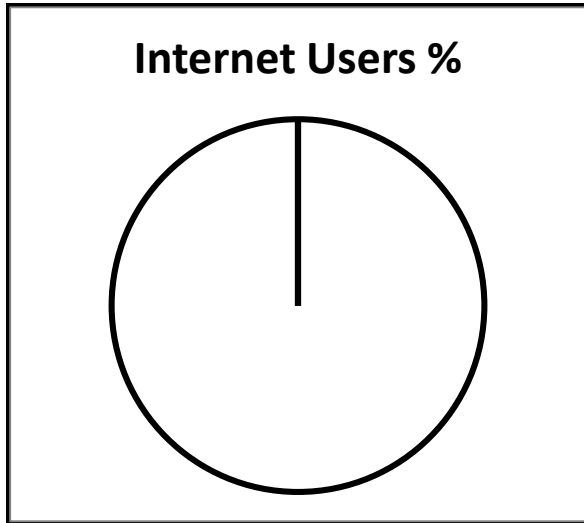
4. Explain the break down and for local government in your country. What is the legal age for voting in your country?

5. Identify and explain the differences of at least 3 major political parties in your government. Use the back of the paper if needed.

6. Find a blank map of your country. On this map, create a key/legend describing the Landforms and climate of your country. (Blank maps Foreign Countries>Click Globe)

QUESTIONS 7-14 ARE FOUND IN ABC-CLIO FACTS and FIGURES. THESE QUESTIONS WILL COMPARE YOUR COUNTRY TO THE UNITED STATES


7. Create charts depicting the use of technology/communication focusing on the Internet



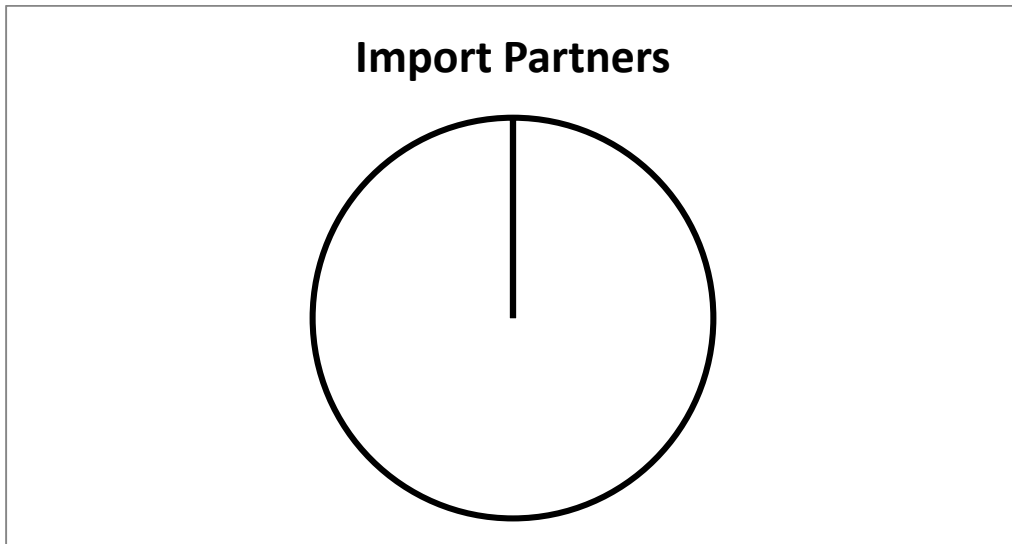
8. Identify the following for your country: Facebook Users, Land Base-Phones, and Mobile Phone Subscribers. Compare these numbers to usage within the United States.

		United States
Facebook		
Land-Based Phones		
Mobile Phone Subscribers		

9. Create a chart comparing Active Military service.



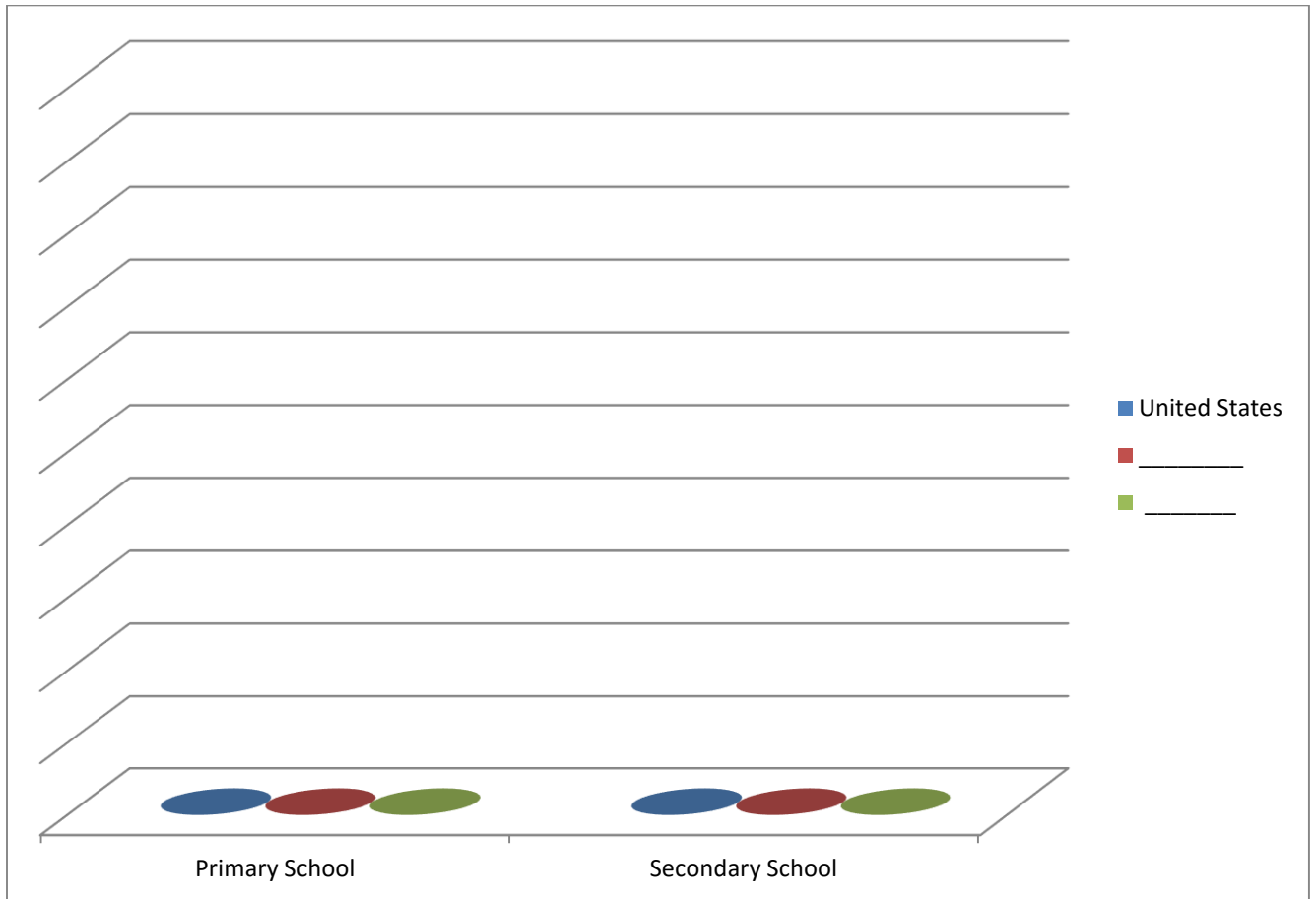
10. Create a pie chart identifying the key import partners of your country. Within these key partners, identify any partners that are shared by the United States. Refer to Trade within Facts and Figures



13. Compare enrollment of Overall, Males, and Females in Secondary Education and also Tertiary Education compared to the United States.

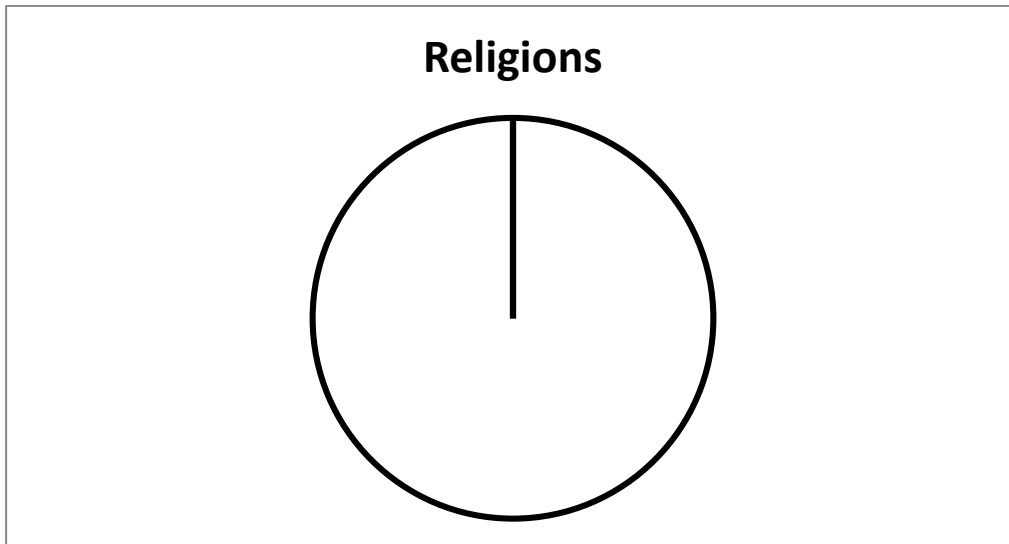
Secondary Education	Overall	Males	Females	Tertiary Education	Overall	Males	Females
United States				United States			

14. Create charts comparing the teacher to student ratio in both primary and secondary education compared to the United States.



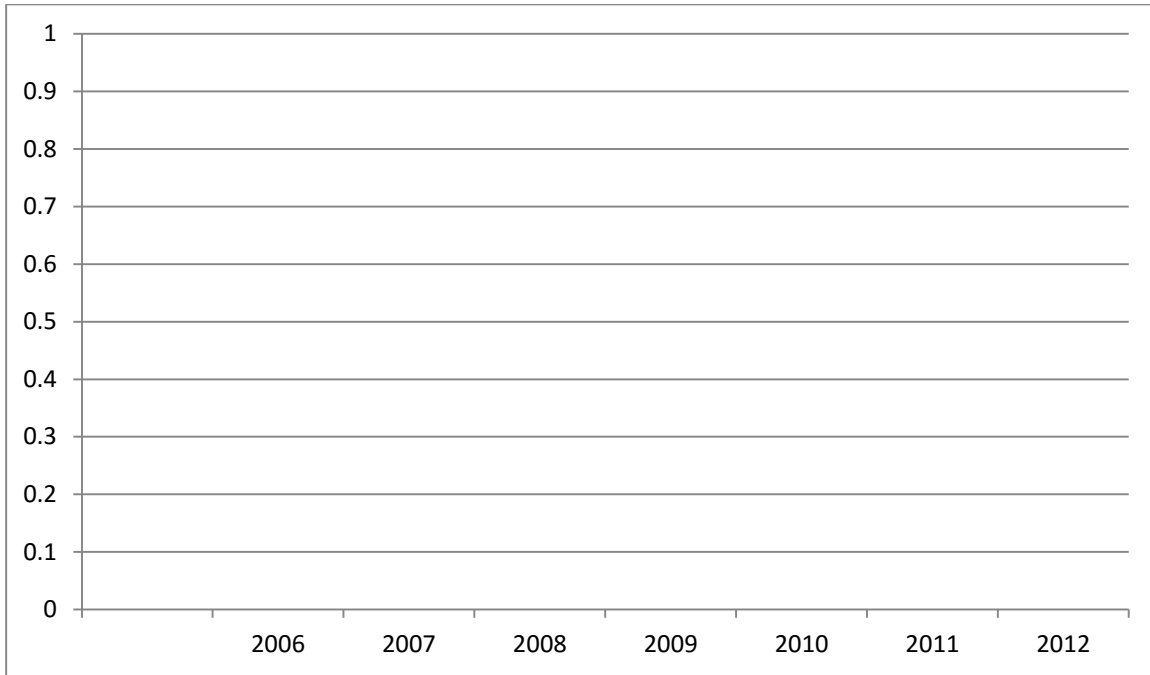
QUESTIONS 15-20 ARE FOUND IN GALE JR.

15. Create a pie chart identifying the key religions of your country.

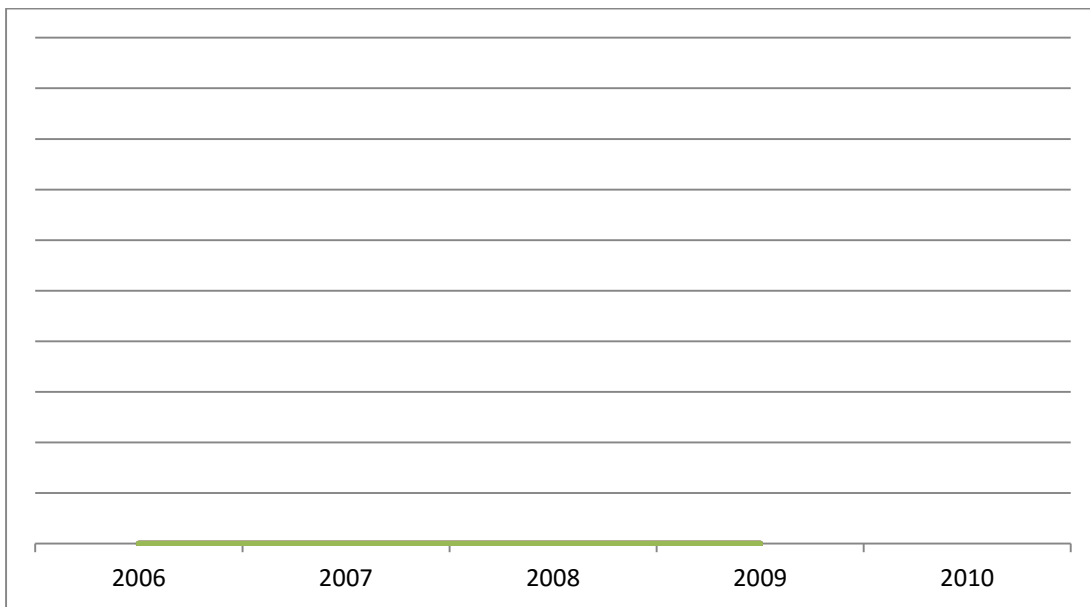


16. What are the mandatory years of education within your country? Create a flow chart depicting the path of education within your country.

17. Recreate the Yearly Growth Rate of your country in the space provided, explain what this means.



18. Recreate the Yearly Balance of Trade for your country and explain what this means.



Referring to the Selected Social Indicators, identify the statistics of your specific country and answer the following questions.

Indicator		Low-Income	High-Income	United States
Per Capital gross national income		\$1,257	\$37,183	\$47,020
Number of physicians per 1,000 people		0.2	2.6	2.7
Number of Pupils per 1,000 people		47	15	14
Internet Users per 1,000 people		26	722	780

19. Based on the above statistics is your country closer to Low-Income, High-Income, or the United States in terms of Per Capital gross national income?

20. Rank in order (lowest to highest) the number of pupils per 1,000 people.

21. Based on the above statistics is your country closer to Low-Income, High-Income, or the United States in terms of internet users? Why do you think your country is closest to this target?

26. Ethnic Group _____(Use back or other sheet if needed)

